

Nom: Data:



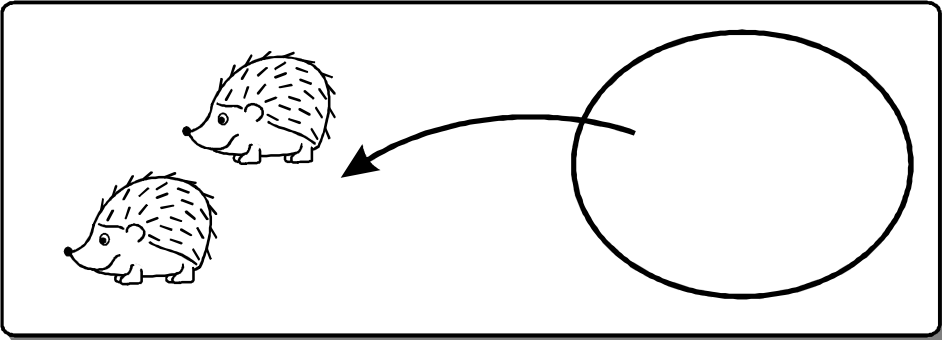
Fem problemes

0 z1 A - 9
FITXA 2





2) Tinc 2  grans i 1  petit.

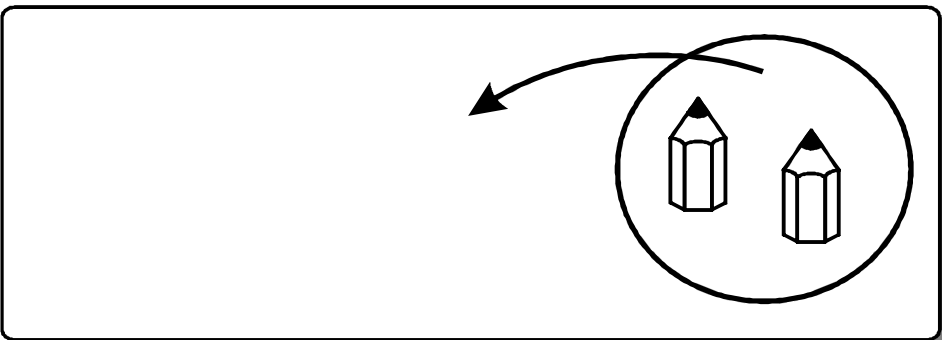
Quants ericons tinc en total?

	<p>OPERACIÓ</p> <table border="1"><tr><td></td><td>2</td></tr><tr><td>+</td><td></td></tr><tr><td colspan="2"><hr/></td></tr><tr><td></td><td></td></tr></table>		2	+		<hr/>			
	2								
+									
<hr/>									

Resposta: Tinc ericons.

2) A la taula tinc 4  i em donen 2 .

Quants llapis tinc?

	<p>OPERACIÓ</p> <table border="1"><tr><td></td><td></td></tr><tr><td>+</td><td>2</td></tr><tr><td colspan="2"><hr/></td></tr><tr><td></td><td></td></tr></table>			+	2	<hr/>			
+	2								
<hr/>									

Resposta: Ara tinc llapis.

