

Nom:



Data:




fem problemes


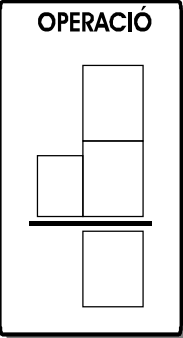
0 z1 A - 9
FITXA 13



1) A la fruitera hi ha 7  i jo agafe 2 
per berenar.

Quantes plàtans queden dins la fruitera?


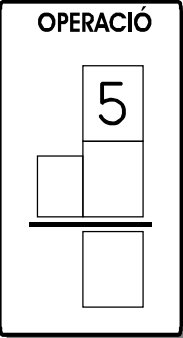


	<p>OPERACIÓ</p> 
---	--

Resposta: A la fruitera queden plàtans.

2) A la butxaca dreta tinc 5  i a la butxaca
esquerra tinc 2 .

Quantes monedes tinc en total?

	<p>OPERACIÓ</p> 
--	---

Resposta: En total tinc monedes.