




Matemàtiques


FITXA 1

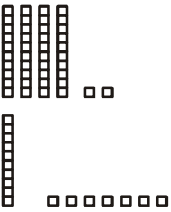



OPERACIONS AMB BARRES I FITXES

1/ Resol aquestes sumes utilitzant els dibuixos d'unitats i desenes del costat.


$$\begin{array}{r} 20 \\ + 50 \\ \hline \end{array}$$


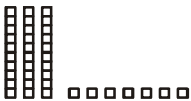
$$\begin{array}{r} 44 \\ + 20 \\ \hline \end{array}$$



$$\begin{array}{r} 42 \\ + 17 \\ \hline \end{array}$$


$$\begin{array}{r} 16 \\ + 31 \\ \hline \end{array}$$


2/ Resol aquestes restes utilitzant els dibuixos d'unitats i desenes del costat.

$$\begin{array}{r} 70 \\ - 20 \\ \hline \end{array}$$


$$\begin{array}{r} 37 \\ - 23 \\ \hline \end{array}$$


$$\begin{array}{r} 15 \\ - 12 \\ \hline \end{array}$$


$$\begin{array}{r} 64 \\ - 41 \\ \hline \end{array}$$
