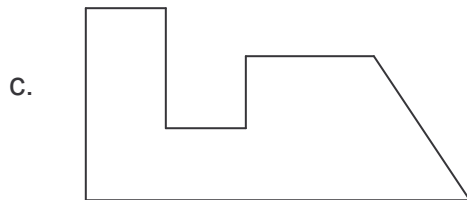



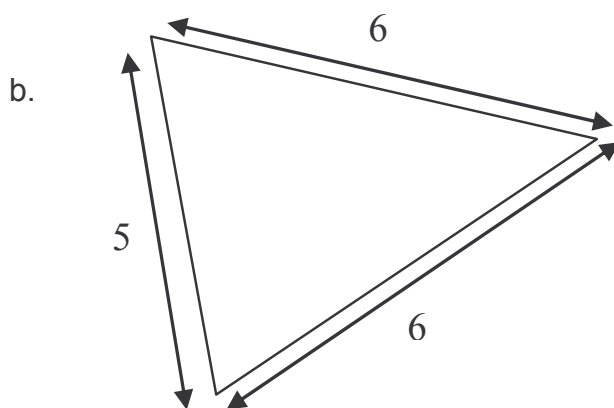
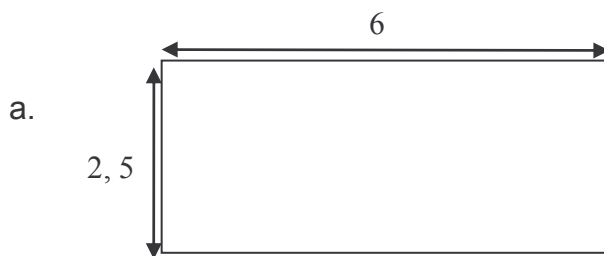
# Perimeter and Area 2 - KEY

1. Use your ruler to measure each shape and calculate perimeter and area:



	Perimeter	area
a	14cm	6 cm <sup>2</sup>
b	12cm	9cm <sup>2</sup>
c	16.3cm	8.15cm <sup>2</sup>

2. Calculate perimeter and area of all these shapes:



	Perimeter	area
a	17 cm	15cm <sup>2</sup>
b	17cm	13.5cm <sup>2</sup>
c	$\frac{d\pi}{2}$ 5.2x3.14= 8.164cm	$\frac{\pi r^2}{2}$ (3.14x6.76):2= =10.6132cm <sup>2</sup>

**Be aware that these quantities can change depending on the printing and photocopying.**