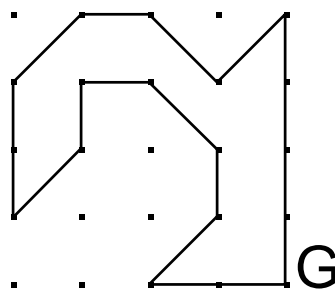
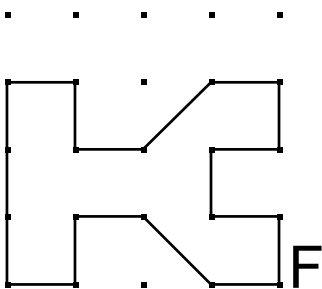
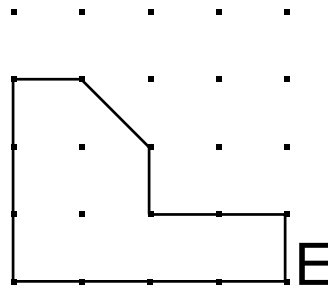
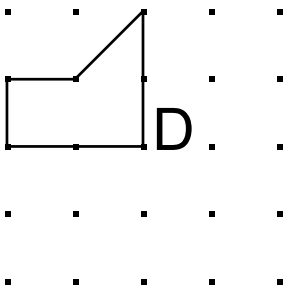
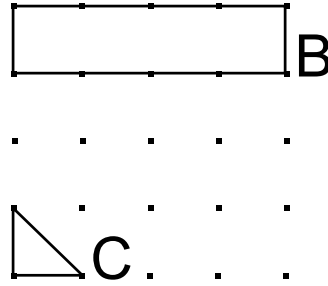
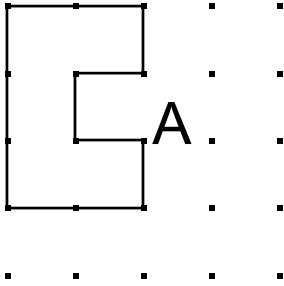


Considera que aquesta figura té 1 unitat d'àrea.

Calcula l'àrea de les figures següents:



Solució

A. 2 1/2 u

B. 2 u

C. 1/4 u

D. 1 1/4 u

E. 3 3/4 u

F. 4 u

G. 4 u

