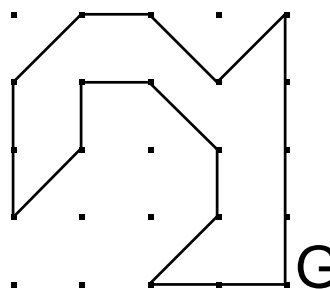
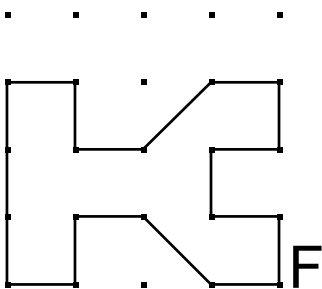
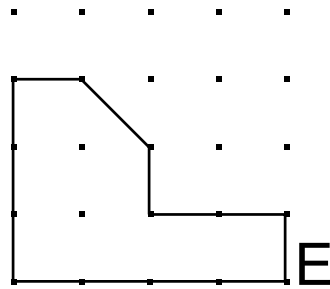
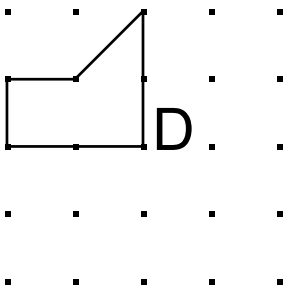
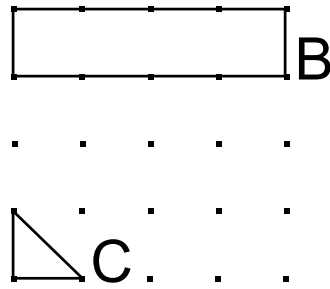
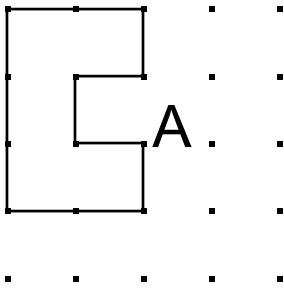


Considera que aquesta figura té 1 unitat d'àrea.

Calcula l'àrea de les figures següents:



Solució

A. $3 \frac{1}{3}$ u

B. $2 \frac{2}{3}$ u

C. $\frac{1}{3}$ u

D. $1 \frac{2}{3}$ u

E. 5 u

F. $5 \frac{1}{3}$ u

G. $5 \frac{1}{3}$ u

