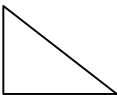
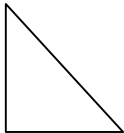
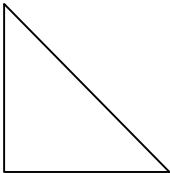

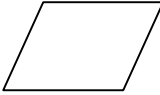


<b>a</b>	<b>6</b>	<b>TANGRAM</b>	Alumne/a	Nivell
				Data

A cada fila, agafa com a unitat de superfície la figura indicada i completa la taula següent, indicant la superfície de cada figura i la superfície total de tot el tangram.

					Superfície total ( 7 peces)
1 u			2 u		
	1 u				
		1 u			
			1 u		
				1 u	

