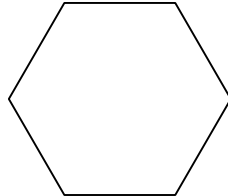
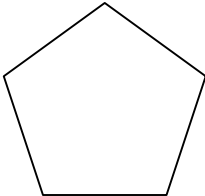
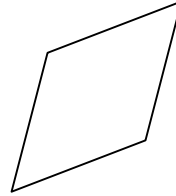

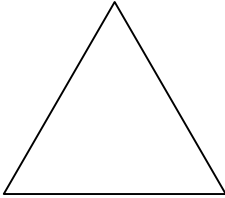


Construeix aquestes figures amb tiges d'una mateixa longitud:



Solució

3 tiges = triangle
4 tiges = quadrat
4 tiges = rombe
5 tiges = pentàgon
6 tiges = hexàgon

Observacions

Material:

- nusos de dos pins.
- tiges d'una mateixa longitud.

