

Nom: ..... Data: .....

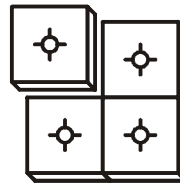


# Sumem peces

FITXA 2

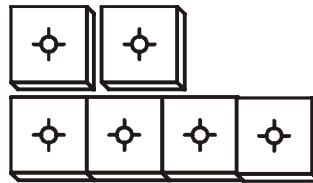
Relaciona.

$4 + 1$



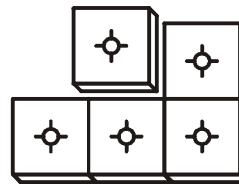
4

$3 + 1$



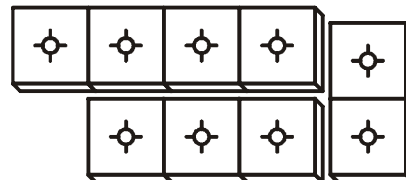
5

$4 + 1 + 1$



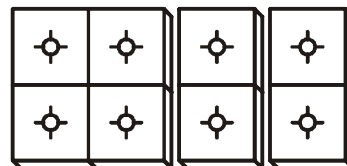
6

$4 + 3$



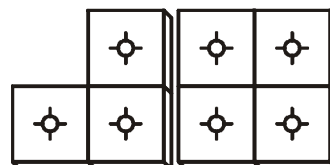
7

$4 + 2 + 2$



8

$4 + 3 + 2$



9