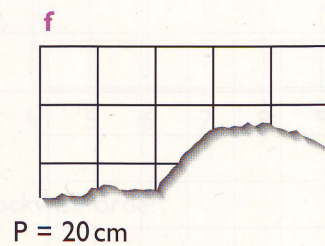
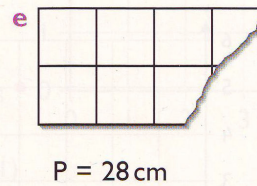
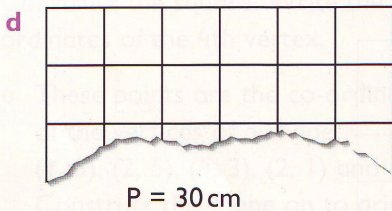
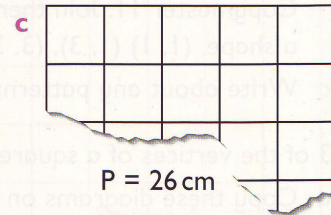
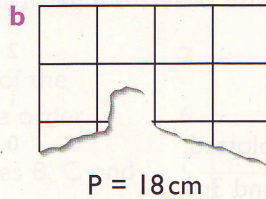
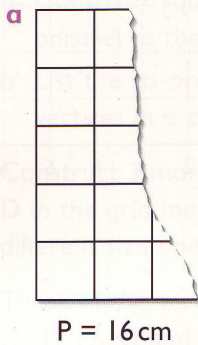


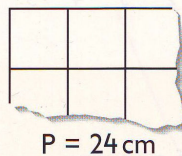
Rectangle round-up

Practice

- 1 Copy and complete these rectangles on 1 cm squared paper. The perimeters are given for each rectangle.



- 2 Find three different ways to complete this rectangle.



- 3 Construct 5 rectangles each with a perimeter of 22 cm.
- 4 The perimeter of a rectangle is 60 cm. The shorter side is 9 cm. What is the length of the longer side?